



Activité : Fraction et partage


1) Pour chaque figure, indiquer quelle fraction de sa surface est coloriée.



a)



b)



c)

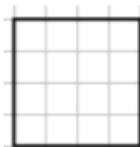


d)




e)

2) Reproduire chacune des figures ci-dessous, puis la partager pour représenter la fraction demandée.



Colorie $\frac{3}{8}$ de la surface.




Colorie $\frac{5}{7}$ de la surface.




Colorie $\frac{3}{4}$ de la surface.

Activité : Fraction et partage


1) Pour chaque figure, indiquer quelle fraction de sa surface est coloriée.



a)



b)



c)

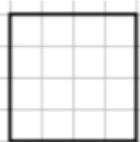


d)




e)

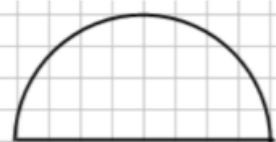
2) Reproduire chacune des figures ci-dessous, puis la partager pour représenter la fraction demandée.



Colorie $\frac{3}{8}$ de la surface.



Colorie $\frac{5}{7}$ de la surface.



Colorie $\frac{3}{4}$ de la surface.